



Equivalent Fraction Flags



By Melissa Shutler



Teacher Notes



Before you start these pages, please visit this website:

<http://resources.oswego.org/games/fractionflags/fractionflags.html>

(you can also google “fraction flags” to find it easily)

Complete the flags with your students. This will make these pages much easier for students to understand.

In this pack there are five pages of fraction flags. Students can complete them on their own or with partners. You can start with halves and work up to more difficult fractions.

At the end, students will create a flag and write the equivalent fractions they included.

Name _____

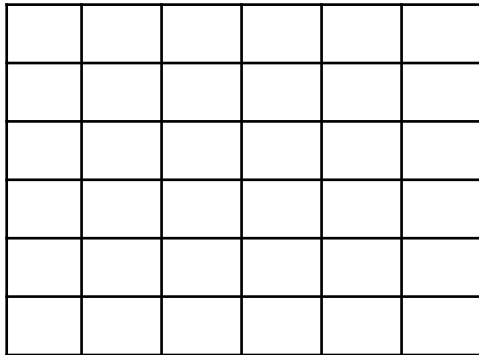
Date _____

Equivalent Flags- Halves

Create the flags below. Then write the equivalent fractions.

Indonesia's Flag

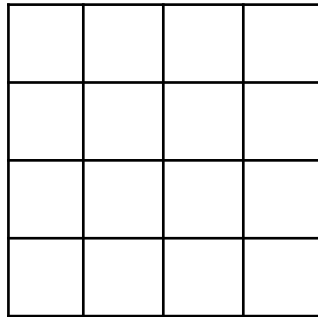

Color the top row red. Keep the bottom row white.



$$\frac{1}{2} = \frac{\quad}{36}$$

Vatican City's Flag

Color the left column yellow.
Keep the right column white.

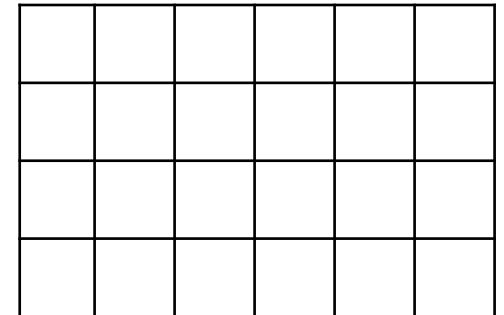



$$\frac{1}{2} = \frac{\quad}{16}$$

(C) Melissa Shutler 2015

Columbia's Flag

Color the top row yellow.
Color the second row blue.
Color the third row red.



$$\frac{1}{2} = \frac{\quad}{24}$$

Name _____

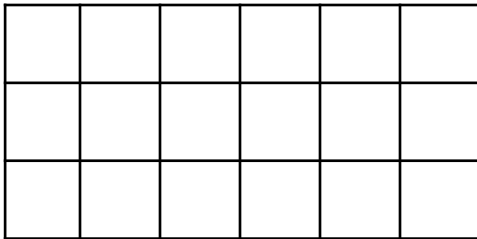
Date _____

Equivalent Flags- Thirds

Create the flags below. Then write the equivalent fractions.

Argentina's Flag

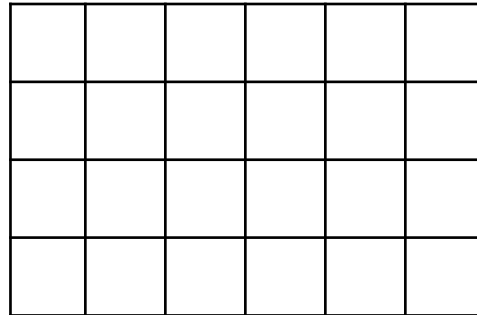

Color the top row red, the middle row white, and the bottom row red.



$$\frac{1}{3} = \frac{\quad}{18}$$

France's Flag

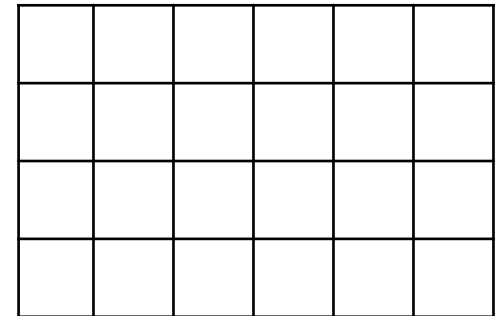
Color the first column blue, the middle column white, and the last column red.



$$\frac{1}{3} = \frac{\quad}{24}$$

Madagascar's Flag

Keep the left section white. Color the top right section red and the bottom green.



$$\frac{1}{3} = \frac{\quad}{24}$$

Name _____

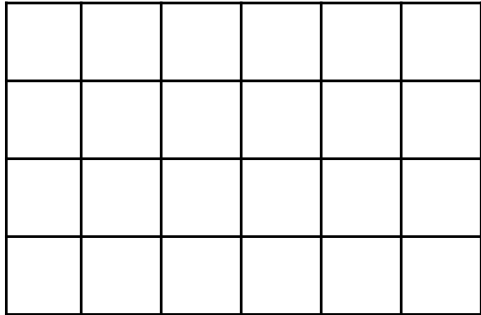

Date _____

Equivalent Flags- Fourths

Create the flags below. Then write the equivalent fractions.

Mauritius' Flag

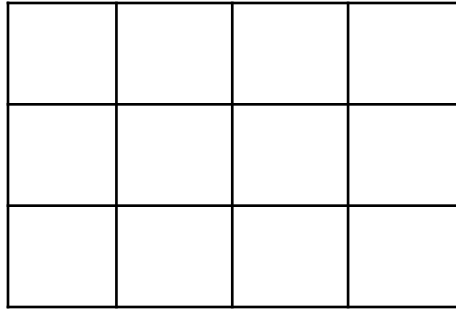
Color the top row red, the second row blue, the third row yellow, and the fourth row green.



$$\frac{1}{4} = \frac{\quad}{24}$$

United Arab Emirates' Flag

Color the left row red. Color the top row green. Keep the middle row white. Color the bottom row black.

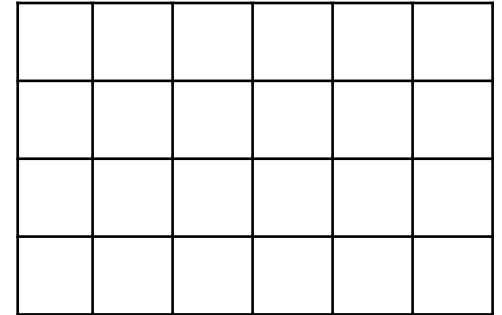
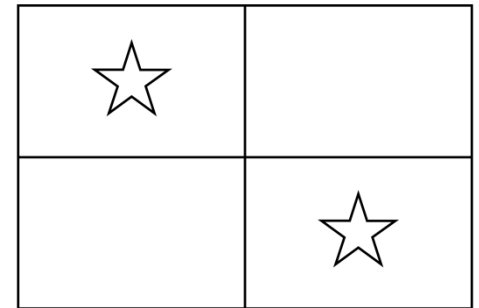


$$\frac{1}{4} = \frac{\quad}{12}$$

(C) Melissa Shutler 2015

Panama's Flag

Color the top left box white, the top right red, the bottom left blue, and the bottom right white.



$$\frac{1}{4} = \frac{\quad}{24}$$

Name _____

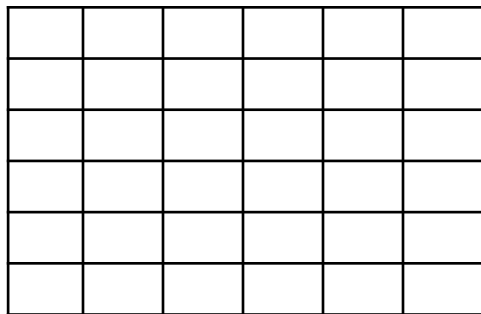

Date _____

Equivalent Flags- Fifths and Sixths

Create the flags below. Then write the equivalent fractions.

Uganda's Flag

Color the top row black, the second row yellow, the third row red, the fourth row black, the fifth row yellow, and the sixth row red.

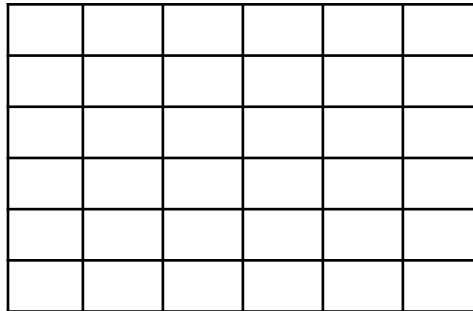



$$\frac{1}{6} = \frac{\quad}{36}$$

$$\frac{2}{6} = \frac{\quad}{36}$$

Costa Rica's Flag

Color the top row blue, the second row white, the third row red, the fourth row white, and the fifth row blue.

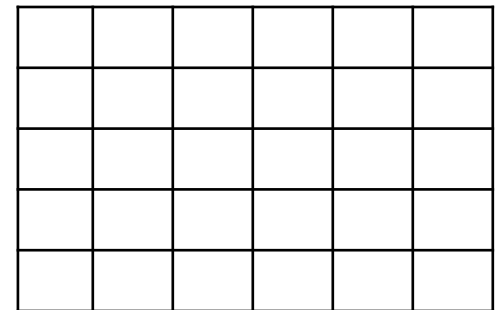



$$\frac{1}{5} = \frac{\quad}{30}$$

(C) Melissa Shutler 2015

Latvia's Flag

Color the top row red. Keep the middle row white. Color the bottom row red.



$$\frac{1}{3} = \frac{\quad}{30}$$

$$\frac{2}{3} = \frac{\quad}{30}$$

Name _____

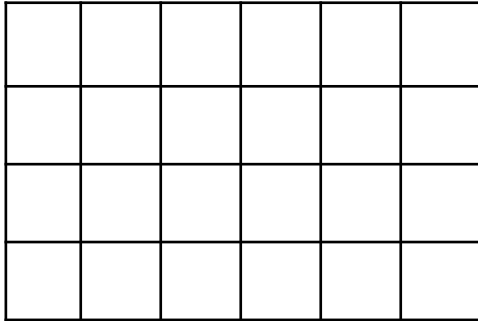
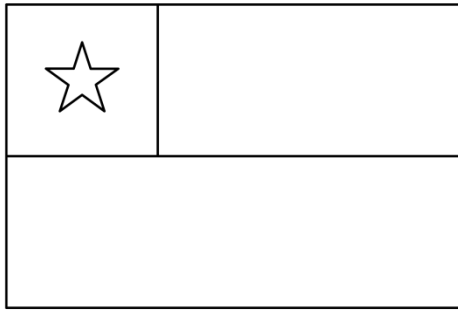
Date _____

Equivalent Flags- More Fractions

Create the flags below. Then write the equivalent fractions.

Chile's Flag

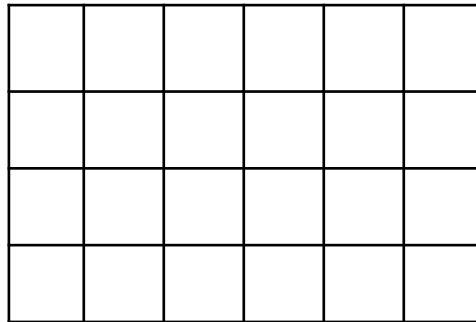

Color the top left box blue.
Color the bottom row red. The rest of the flag is white.



List the equivalent fractions you see

Taiwan's Flag

Color the top left box blue.
Color the rest of the flag red.

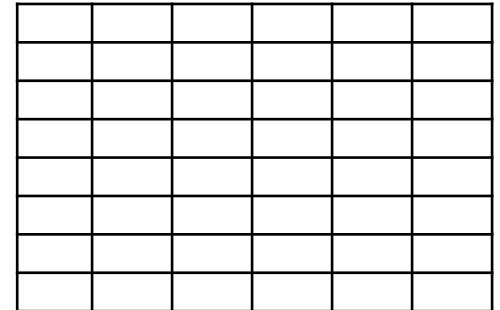
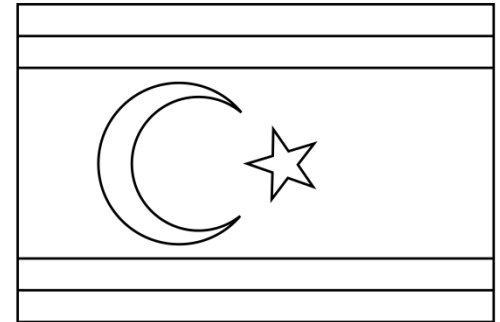


List the equivalent fractions you see

(C) Melissa Shutler 2015

Northern Cyprus's Flag

Color the top row white, the second row red, the third row white, the fourth row red, the fifth row white.



List the equivalent fractions you see

Name _____

Date _____

Create a Flag

Design your own flag containing at least two fractions. Write two sets of equivalent fractions that you see..

Equivalent Fractions:

Thank you for your purchase!
www.evidenceoflearningblog.wordpress.com



Thanks to:

